

Test your maths

Use the price tags to work out the sums on our tasty shopping list.



£5

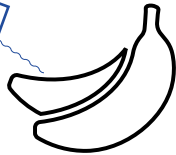
£2.50




£3



£1.50




£2





£4


£0.50








$$\begin{array}{r} \text{---} \\ + \\ \text{---} \\ = \\ \text{---} \end{array}$$






$$\begin{array}{r} \text{---} \\ + \\ \text{---} \\ = \\ \text{---} \end{array}$$






$$\begin{array}{r} \text{---} \\ + \\ \text{---} \\ = \\ \text{---} \end{array}$$





$$\begin{array}{r} \text{---} \\ + \\ \text{---} \\ = \\ \text{---} \end{array}$$




$$\begin{array}{r} \text{---} \\ + \\ \text{---} \\ = \\ \text{---} \end{array}$$




$$\begin{array}{r} \text{---} \\ + \\ \text{---} \\ = \\ \text{---} \end{array}$$


FLOSSIE'S

FUN

CLUB

Answers

Top row: 1) £3.50 2) £7.50 3) £4.50

Bottom row: 4) £8 5) £2.50 6) £4